

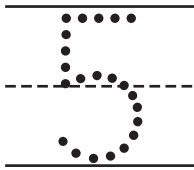
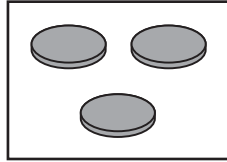
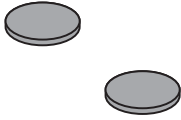
Name \_\_\_\_\_

Reteaching

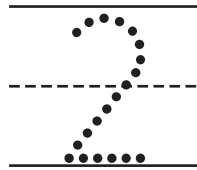
9-2

# Writing Number Sentences for 4 and 5

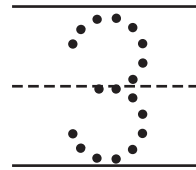
1



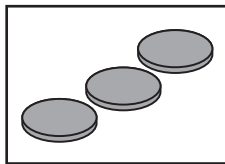
=




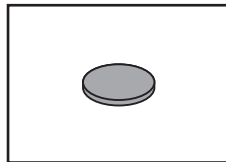
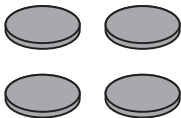
+



2



3



**Directions** Have children: 1 count the total number of counters and the number of counters in each set. Then trace the numbers and symbols to write the number sentence. 2-3 count the total number of counters and then the parts that are inside and outside the box. Write a number sentence that describes the relationship between the whole and the parts.