

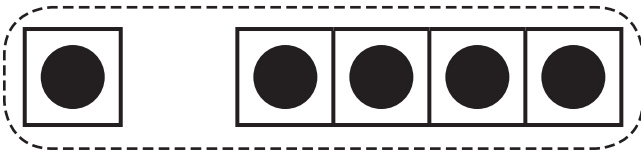
Name _____

Reteaching

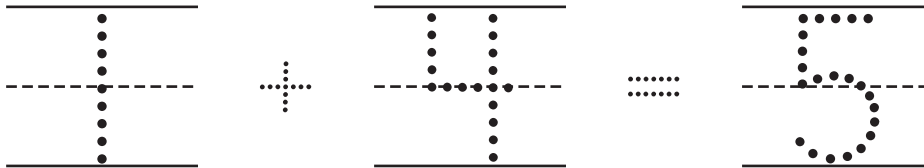
7-5

Finding Sums

1



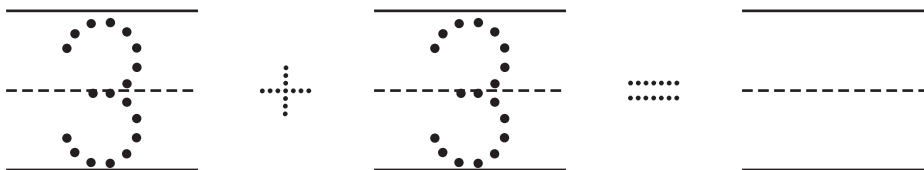
1 and 4 is 5.



2



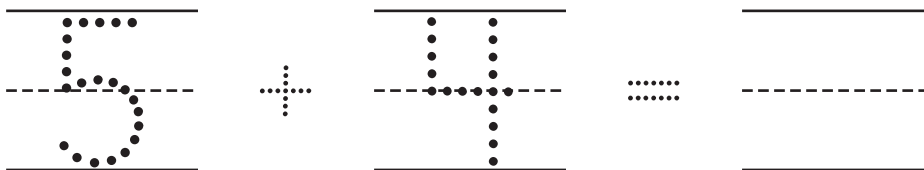
3 and 3 is 6.



3



5 and 4 is 9.



Directions Have children trace the numbers to tell how many there are in each group. Have them circle the two groups to join them. Then have them trace the plus sign *and* equal sign, and write the sum.