

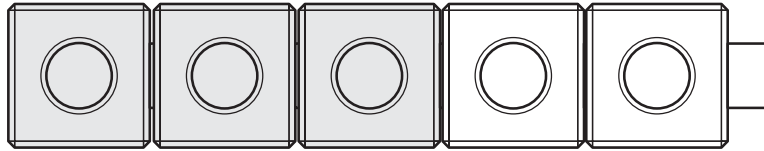
Name \_\_\_\_\_

Reteaching  
**2-9**

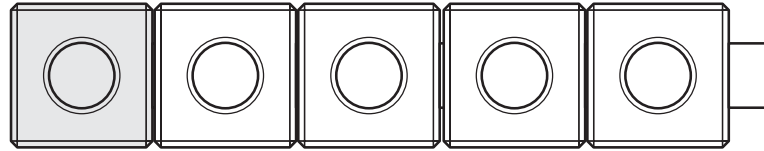
# Problem Solving: Use Objects

1

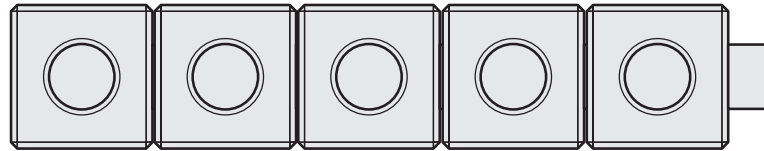
B



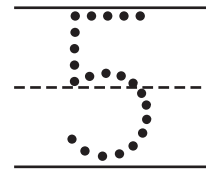
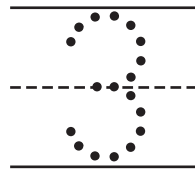
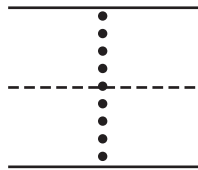
R



G

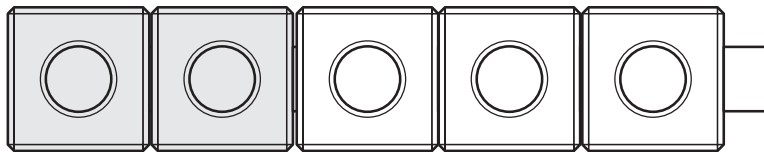


3  
1  
5

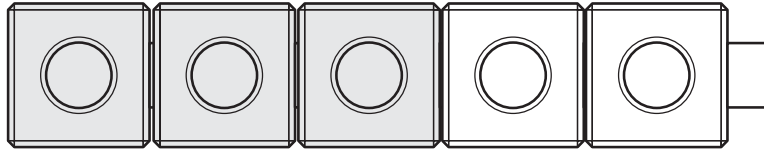


2

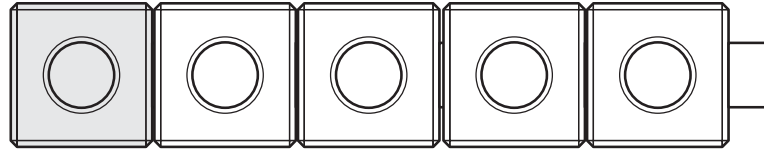
Y



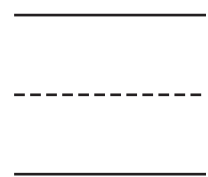
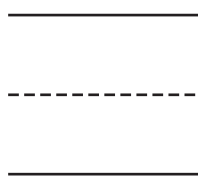
R



B



2  
3  
1



**Directions** Have children listen to each story and write the numbers in order below. ★ *Shea has 3 blue tiles, 1 red tile, and 5 green tiles. Which group has the fewest? Draw a box around the number that tells which group has the fewest.* ② *Mollie has 2 yellow marbles, 3 red marbles, and 1 blue marble. Which group has the most? Circle the number that tells which group has the most.*