

Name _____

Problem Solving: Act It Out



(A)



(B)



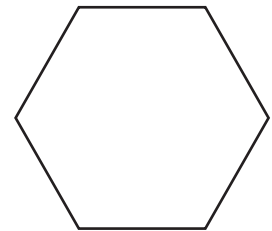

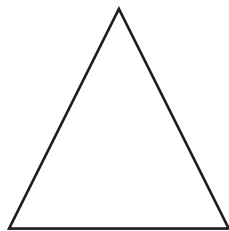

(C)



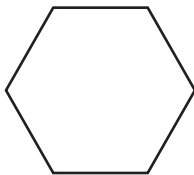
(D)



2




(A)




(C)



(B)



(D)



Directions Have children mark the best answer. ★ Which picture shows the cow next to the barn? ② Which shape is to the right of the circle?