


Name _____

Reteaching

9-4


Writing Number Sentences for 6 and 7

1




6 = 2 + 4

2



_____ = _____ + _____

3



_____ = _____ + _____

Directions Have children: 1 count and trace the number sentence that describes the relationship between the total number of items and the parts of the total; 2-3 write the number sentence that describes each picture.