


Name _____

Reteaching


3-1

Counting 6 and 7


1



2



3



4



Directions In each exercise, have children count the dots and use counters to show that number. Then have them draw dots in the empty box to show how many dots.