

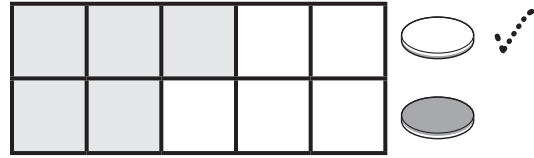
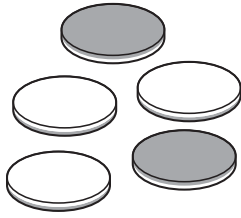
Name _____

Reteaching

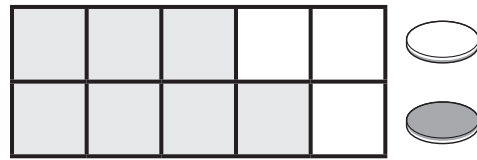
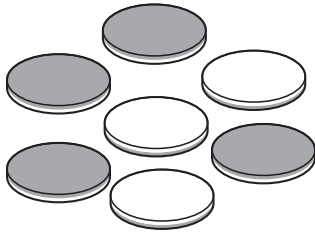
2-6

As Many, More, and Fewer

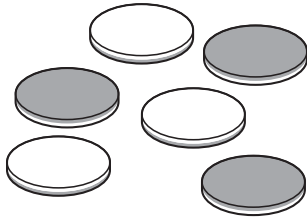
1



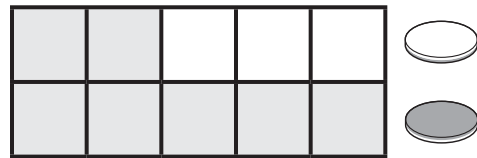
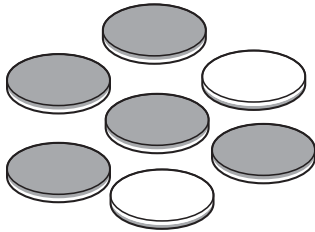
2



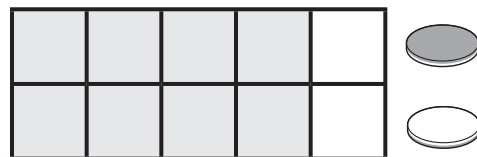

3



4



5



Directions *The graphs show the numbers of each colored counter.* Have children: **1**—**2** put a check mark next to the row with more counters; **3**—**5** put a check mark next to the row with fewer counters. If there are the same number of counters, have children add a check mark next to each row.