


Name \_\_\_\_\_

Reteaching


**11-2**

# Parts of 11, 12, and 13


1



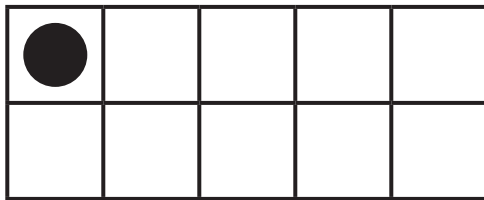
$$12 = 10 + 2$$




2



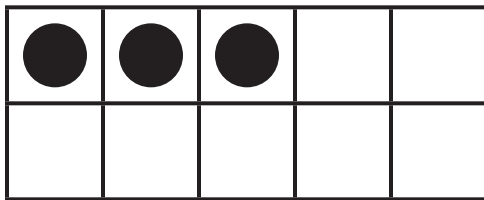
$$11 = 10 + \quad$$



3



$$13 = \quad + \quad$$



**Directions** Have children look at the groups of ten-frames and complete the number sentences.