

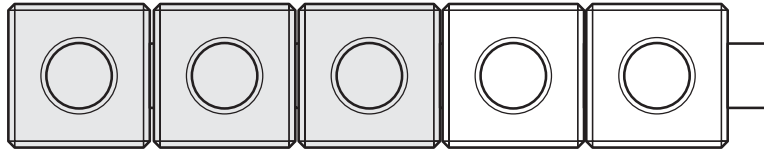
Name _____

Reteaching
2-9

Problem Solving: Use Objects

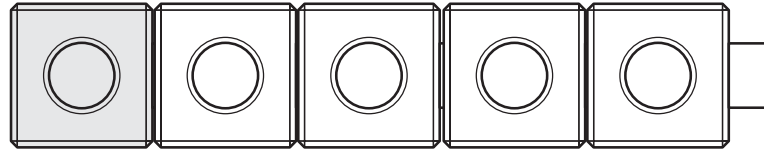
1

B



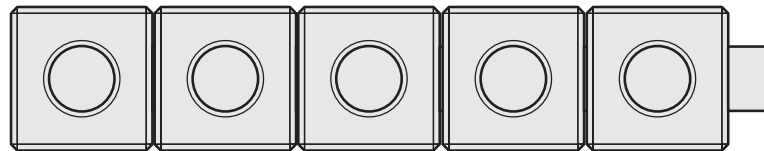
3

R

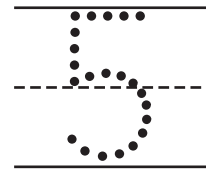
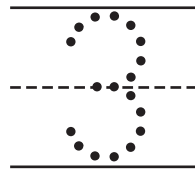
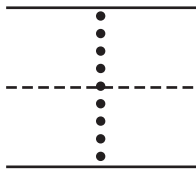


1

G

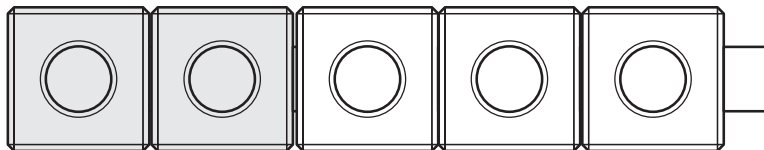


5



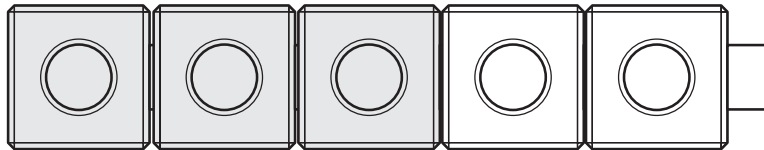
2

Y



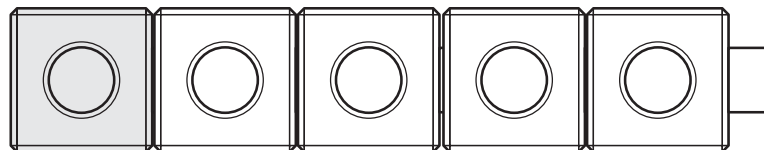
2

R



3

B



1

Directions Have children listen to each story and write the numbers in order below. ★ *Shea has 3 blue tiles, 1 red tile, and 5 green tiles. Which group has the fewest? Draw a box around the number that tells which group has the fewest.* ② *Mollie has 2 yellow marbles, 3 red marbles, and 1 blue marble. Which group has the most? Circle the number that tells which group has the most.*