



Name _____


Stories About Joining

1



3 and 2 is 5.

2



2 and 4 is _____.

3

_____ and _____ is _____.

Directions Have children: 1 – 2 use cubes to show each story and then trace the number sentence that tells the story. Ryan has 3 cubes. Then he takes 2 more cubes. How many cubes are there in all? Alica has 2 cubes. Then she takes 4 more. How many cubes are there in all? 3 create a story about cubes, draw the cubes, and write the number sentence that tells the story.